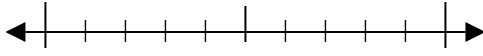


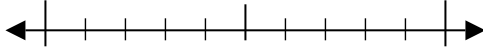


Use the numberlines to round each number to the nearest 10.

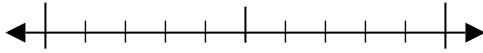
Ex) 58



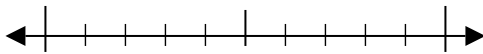
1) 58



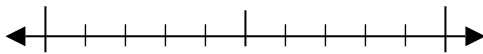
2) 71



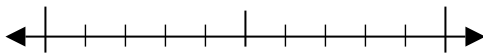
3) 76



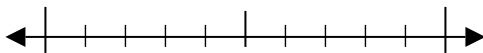
4) 671



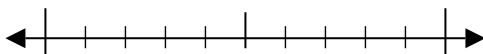
5) 631



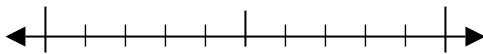
6) 315



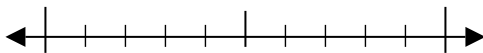
7) 681



8) 6,123



9) 8,907



Answers

Ex. 60

1. _____

2. _____

3. _____

4. _____

5. _____

6. _____

7. _____

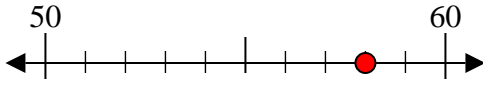
8. _____

9. _____

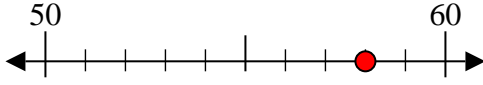


Use the numberlines to round each number to the nearest 10.

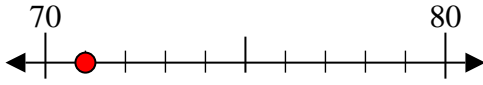
Ex) 58



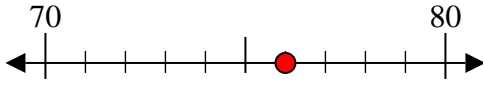
1) 58



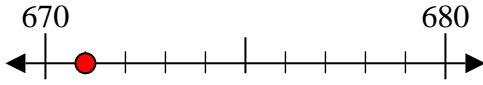
2) 71



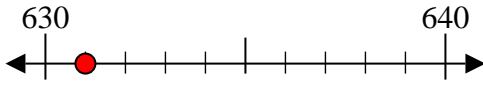
3) 76



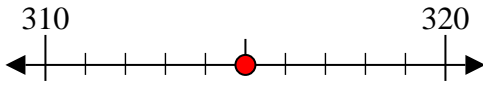
4) 671



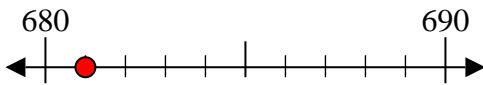
5) 631



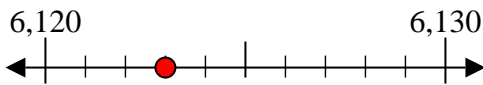
6) 315



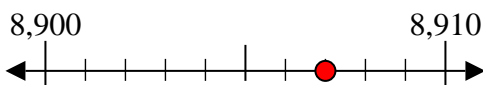
7) 681



8) 6,123



9) 8,907



Answers

Ex. 60

1. 60

2. 70

3. 80

4. 670

5. 630

6. 320

7. 680

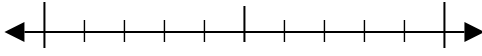
8. 6,120

9. 8,910



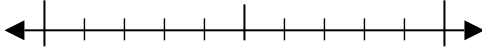
Use the numberlines to round each number to the nearest 10.

Ex) 67



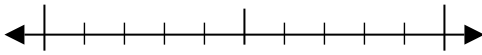
Answers
Ex. 70

1) 37



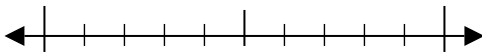
1. _____

2) 19



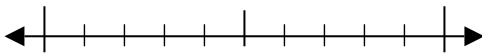
2. _____

3) 76



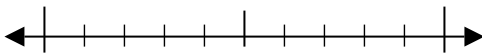
3. _____

4) 810



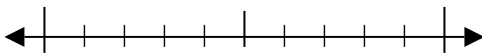
4. _____

5) 924



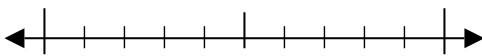
5. _____

6) 849



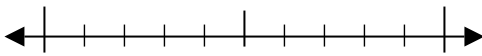
6. _____

7) 428



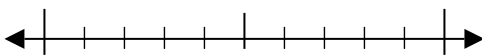
7. _____

8) 9,733



8. _____

9) 2,146

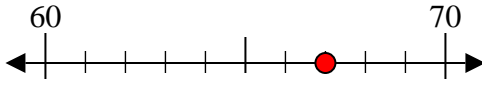


9. _____

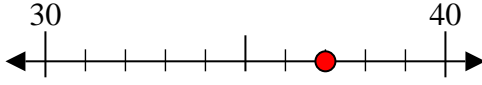


Use the numberlines to round each number to the nearest 10.

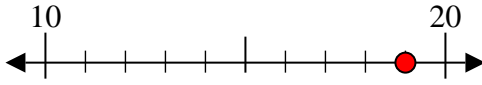
Ex) 67



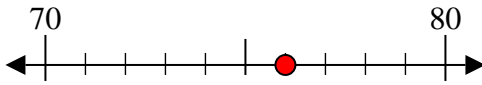
1) 37



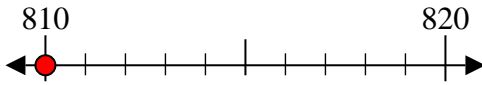
2) 19



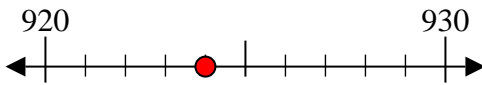
3) 76



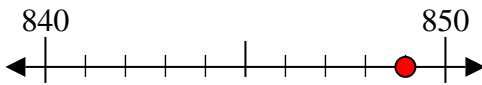
4) 810



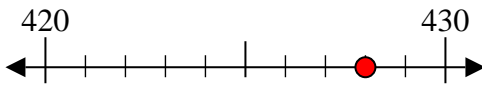
5) 924



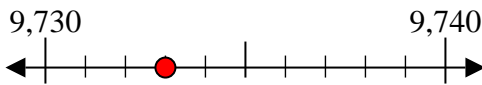
6) 849



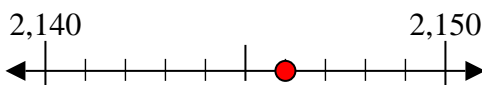
7) 428



8) 9,733



9) 2,146



Answers

Ex. 70

1. 40

2. 20

3. 80

4. 810

5. 920

6. 850

7. 430

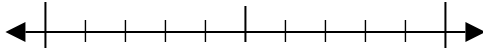
8. 9,730

9. 2,150



Use the numberlines to round each number to the nearest 10.

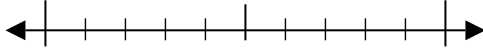
Ex) 63



Answers

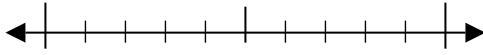
Ex. 60

1) 54



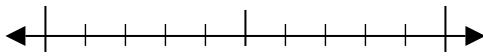
1. _____

2) 41



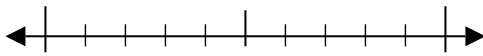
2. _____

3) 22



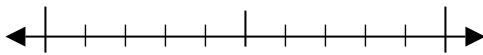
3. _____

4) 363



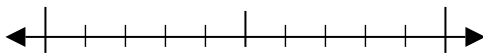
4. _____

5) 370



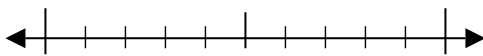
5. _____

6) 391



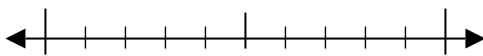
6. _____

7) 818



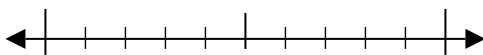
7. _____

8) 5,441



8. _____

9) 8,894

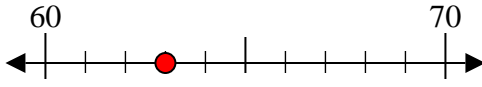


9. _____

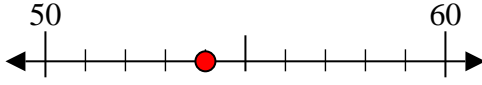


Use the numberlines to round each number to the nearest 10.

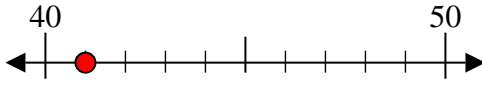
Ex) 63



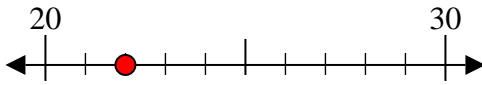
1) 54



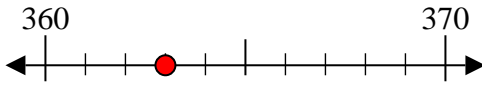
2) 41



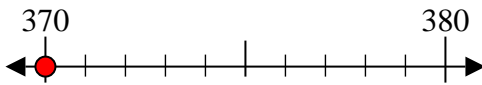
3) 22



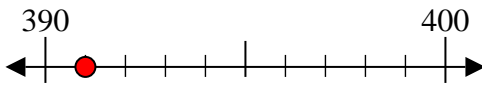
4) 363



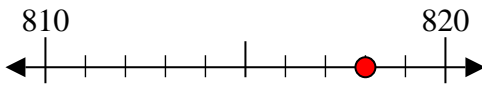
5) 370



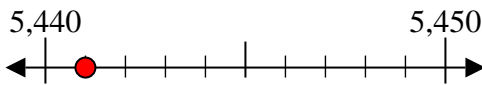
6) 391



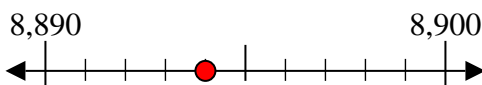
7) 818



8) 5,441



9) 8,894



Answers

Ex. 60

1. 50

2. 40

3. 20

4. 360

5. 370

6. 390

7. 820

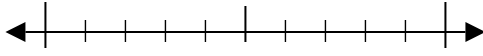
8. 5,440

9. 8,890

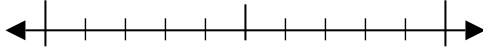


Use the numberlines to round each number to the nearest 10.

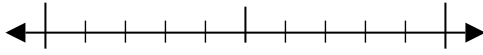
Ex) 38



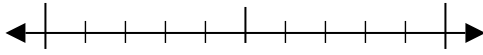
1) 34



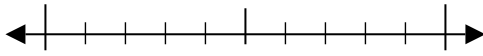
2) 50



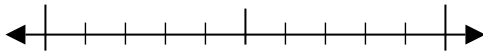
3) 27



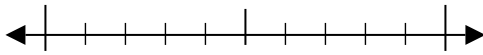
4) 474



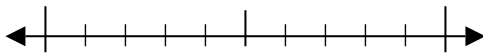
5) 877



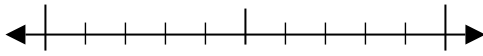
6) 444



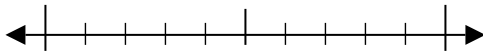
7) 920



8) 4,443



9) 5,882



Answers

Ex. 40

1. _____

2. _____

3. _____

4. _____

5. _____

6. _____

7. _____

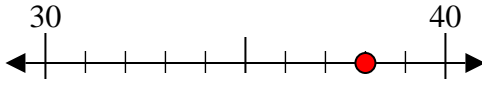
8. _____

9. _____

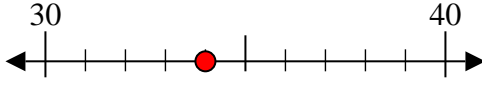


Use the numberlines to round each number to the nearest 10.

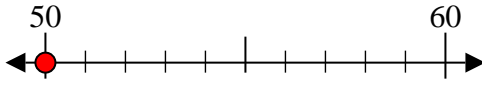
Ex) 38



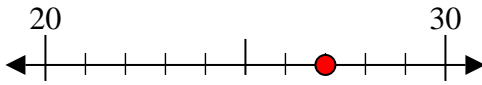
1) 34



2) 50



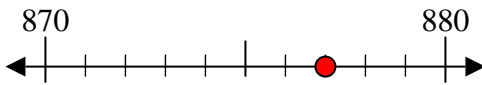
3) 27



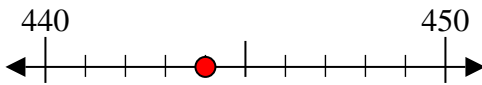
4) 474



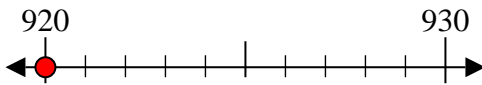
5) 877



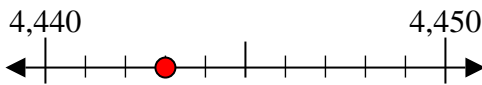
6) 444



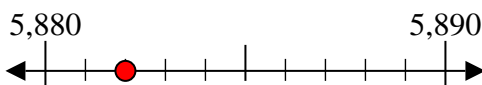
7) 920



8) 4,443



9) 5,882



Answers

Ex. 40

1. 30

2. 50

3. 30

4. 470

5. 880

6. 440

7. 920

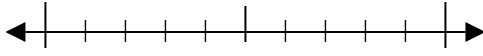
8. 4,440

9. 5,880

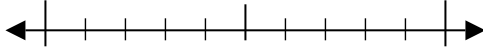


Use the numberlines to round each number to the nearest 10.

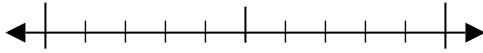
Ex) 29



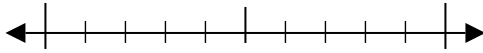
1) 23



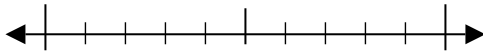
2) 87



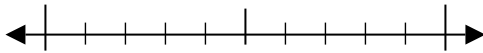
3) 20



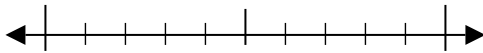
4) 392



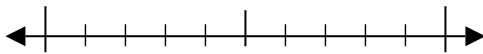
5) 566



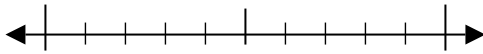
6) 792



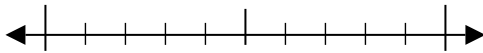
7) 387



8) 5,633



9) 5,609



Answers

Ex. 30

1. _____

2. _____

3. _____

4. _____

5. _____

6. _____

7. _____

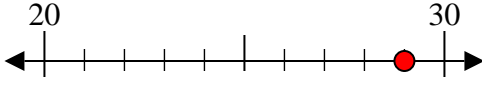
8. _____

9. _____

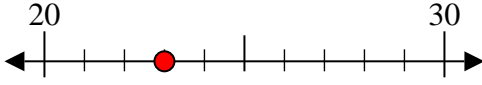


Use the numberlines to round each number to the nearest 10.

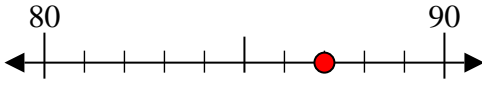
Ex) 29



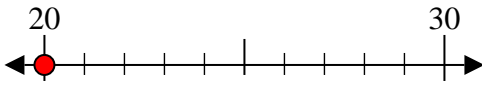
1) 23



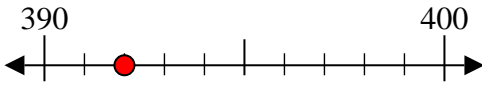
2) 87



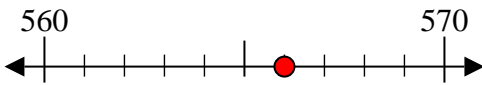
3) 20



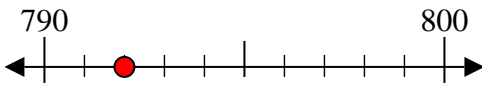
4) 392



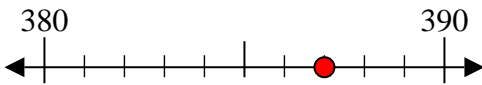
5) 566



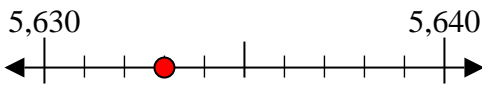
6) 792



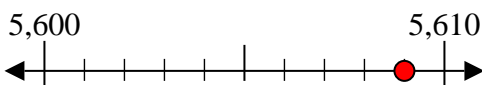
7) 387



8) 5,633



9) 5,609



Answers

Ex. 30

1. 20

2. 90

3. 20

4. 390

5. 570

6. 790

7. 390

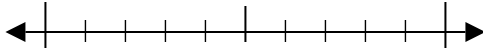
8. 5,630

9. 5,610

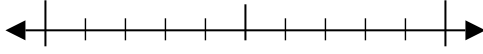


Use the numberlines to round each number to the nearest 10.

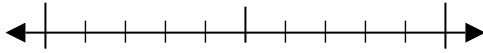
Ex) 19



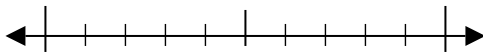
1) 76



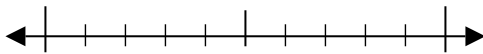
2) 15



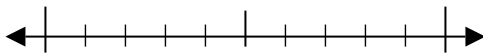
3) 17



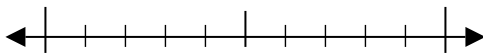
4) 175



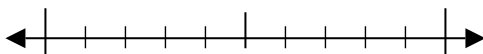
5) 869



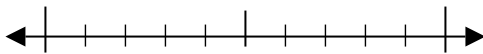
6) 513



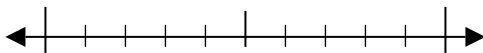
7) 874



8) 6,508



9) 5,582



Answers

Ex. 20

1. _____

2. _____

3. _____

4. _____

5. _____

6. _____

7. _____

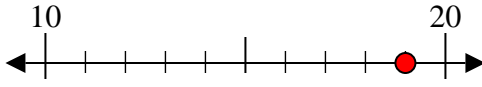
8. _____

9. _____

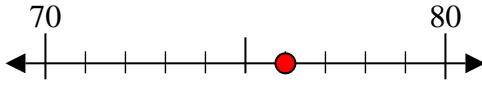


Use the numberlines to round each number to the nearest 10.

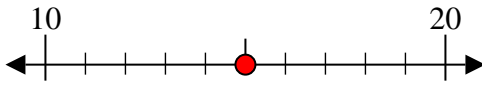
Ex) 19



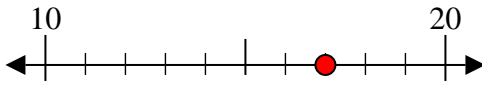
1) 76



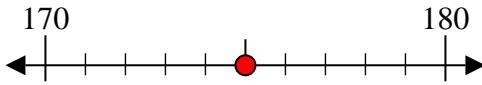
2) 15



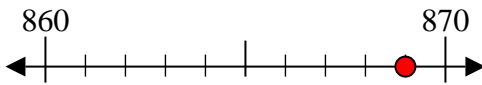
3) 17



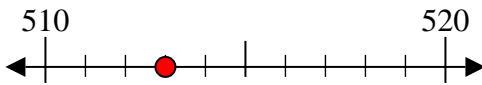
4) 175



5) 869



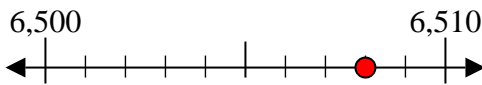
6) 513



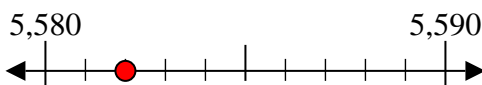
7) 874



8) 6,508



9) 5,582



Answers

Ex. 20

1. 80

2. 20

3. 20

4. 180

5. 870

6. 510

7. 870

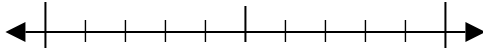
8. 6,510

9. 5,580



Use the numberlines to round each number to the nearest 10.

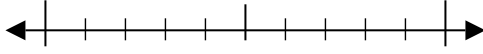
Ex) 33



Answers

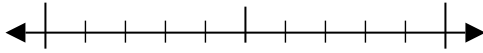
Ex. 30

1) 10



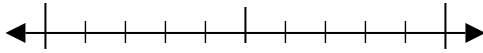
1. _____

2) 95



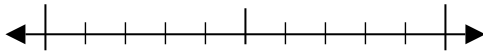
2. _____

3) 27



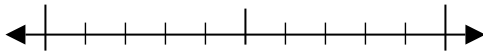
3. _____

4) 464



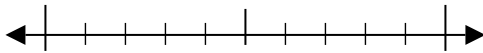
4. _____

5) 772



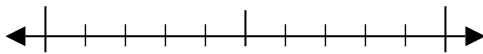
5. _____

6) 117



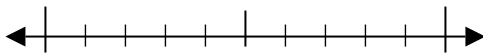
6. _____

7) 690



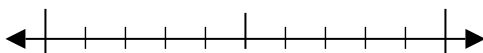
7. _____

8) 2,767



8. _____

9) 8,315

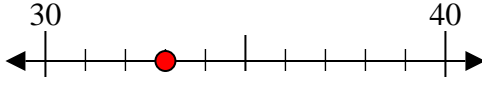


9. _____

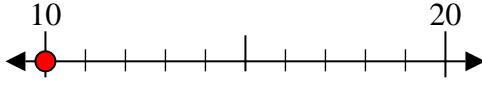


Use the numberlines to round each number to the nearest 10.

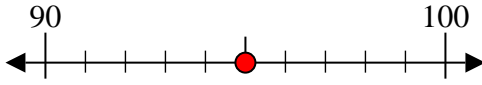
Ex) 33



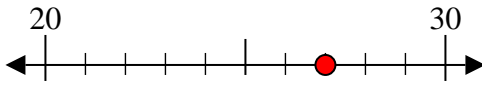
1) 10



2) 95



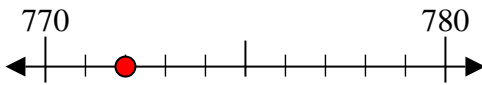
3) 27



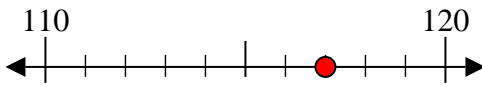
4) 464



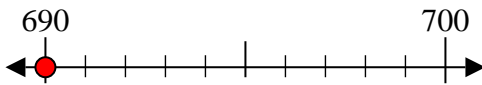
5) 772



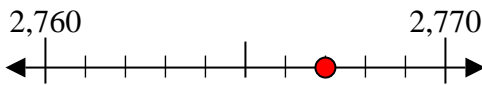
6) 117



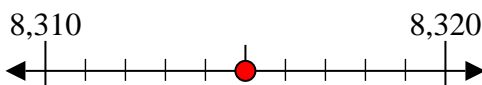
7) 690



8) 2,767



9) 8,315



Answers

Ex. 30

1. 10

2. 100

3. 30

4. 460

5. 770

6. 120

7. 690

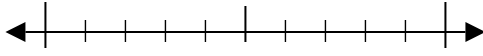
8. 2,770

9. 8,320



Use the numberlines to round each number to the nearest 10.

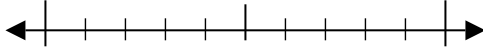
Ex) 72



Answers

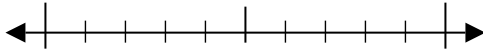
Ex. 70

1) 62



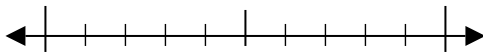
1. _____

2) 27



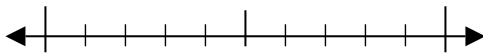
2. _____

3) 25



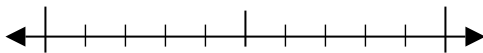
3. _____

4) 395



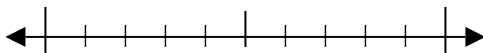
4. _____

5) 156



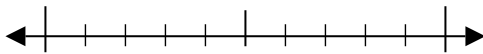
5. _____

6) 249



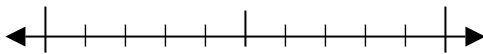
6. _____

7) 366



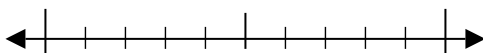
7. _____

8) 6,543



8. _____

9) 3,444

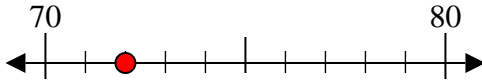


9. _____

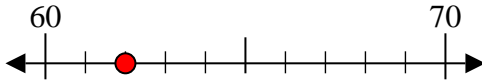


Use the numberlines to round each number to the nearest 10.

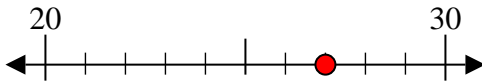
Ex) 72



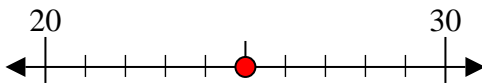
1) 62



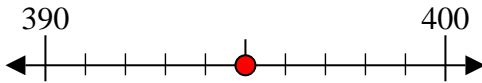
2) 27



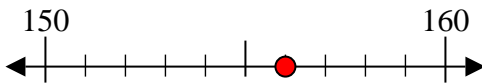
3) 25



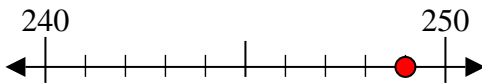
4) 395



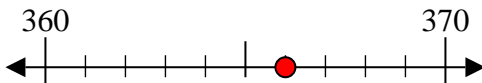
5) 156



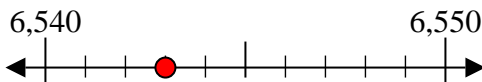
6) 249



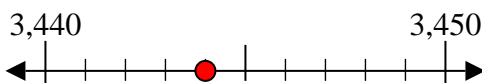
7) 366



8) 6,543



9) 3,444



Answers

Ex. 70

1. 60

2. 30

3. 30

4. 400

5. 160

6. 250

7. 370

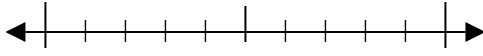
8. 6,540

9. 3,440

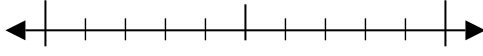


Use the numberlines to round each number to the nearest 10.

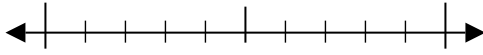
Ex) 57



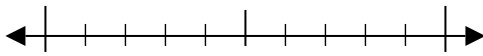
1) 73



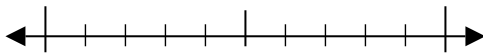
2) 20



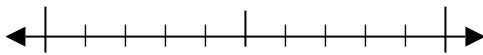
3) 22



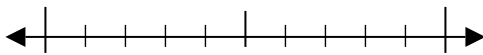
4) 160



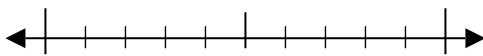
5) 900



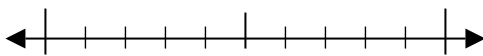
6) 316



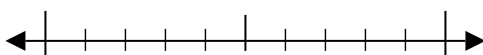
7) 670



8) 3,290



9) 7,055



Answers

Ex. 60

1. _____

2. _____

3. _____

4. _____

5. _____

6. _____

7. _____

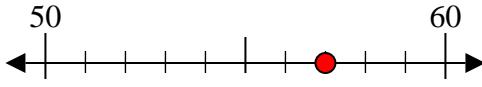
8. _____

9. _____

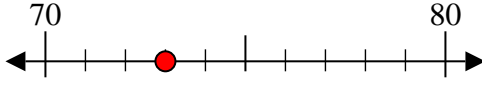


Use the numberlines to round each number to the nearest 10.

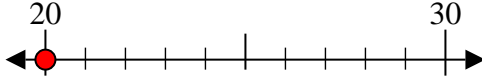
Ex) 57



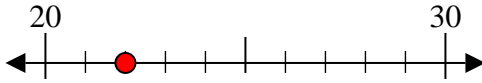
1) 73



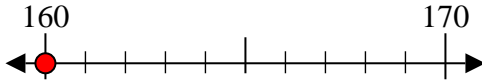
2) 20



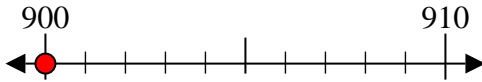
3) 22



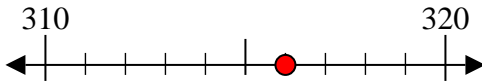
4) 160



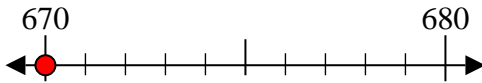
5) 900



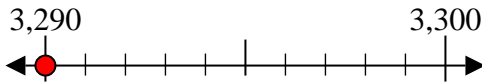
6) 316



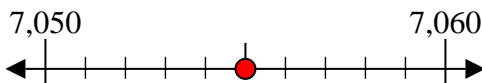
7) 670



8) 3,290



9) 7,055



Answers

Ex. 60

1. 70

2. 20

3. 20

4. 160

5. 900

6. 320

7. 670

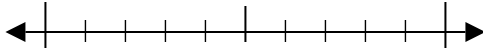
8. 3,290

9. 7,060

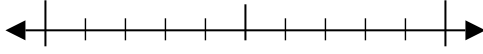


Use the numberlines to round each number to the nearest 10.

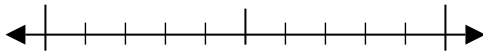
Ex) 67



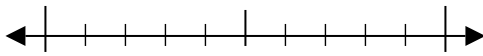
1) 51



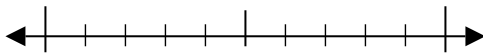
2) 39



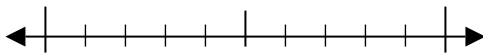
3) 44



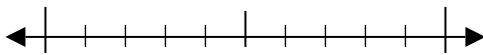
4) 921



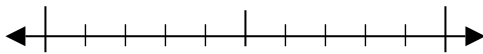
5) 983



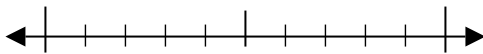
6) 240



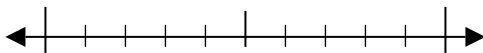
7) 122



8) 9,293



9) 8,045



Answers

Ex. 70

1. _____

2. _____

3. _____

4. _____

5. _____

6. _____

7. _____

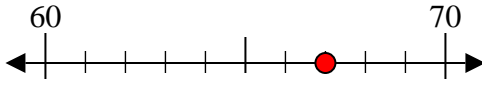
8. _____

9. _____

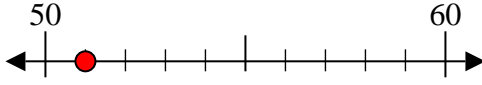


Use the numberlines to round each number to the nearest 10.

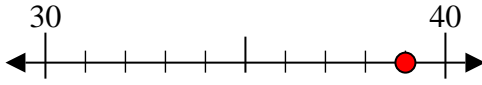
Ex) 67



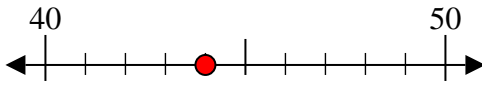
1) 51



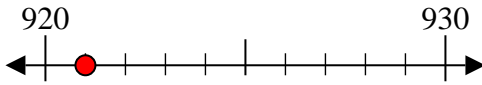
2) 39



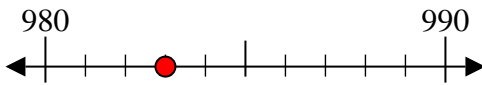
3) 44



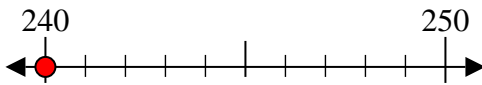
4) 921



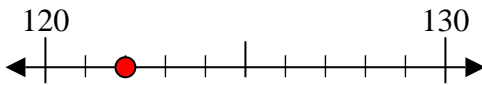
5) 983



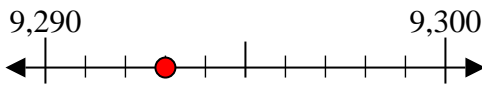
6) 240



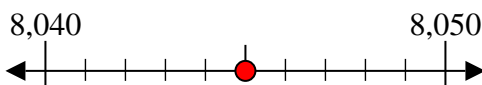
7) 122



8) 9,293



9) 8,045



Answers

Ex. 70

1. 50

2. 40

3. 40

4. 920

5. 980

6. 240

7. 120

8. 9,290

9. 8,050